





ANSWERS

ADDING DOUBLES

Count and complete each double operation.

1  + 

$$\underline{4} + \underline{4} = \underline{8}$$

2  + 



$$\underline{3} + \underline{3} = \underline{6}$$

3  + 



$$\underline{5} + \underline{5} = \underline{10}$$

4  + 

$$\underline{1} + \underline{1} = \underline{2}$$

5  + 

$$\underline{2} + \underline{2} = \underline{4}$$

6  + 

$$\underline{5} + \underline{5} = \underline{10}$$

How Did You Do? 😊 😐 😞