







Name _____

Subtraction Sentence

Write the subtraction sentence for each set.

 $\boxed{12} - \boxed{7} = \boxed{5}$	 $\boxed{8} - \boxed{4} = \boxed{4}$
 $\boxed{10} - \boxed{3} = \boxed{7}$	 $\boxed{9} - \boxed{3} = \boxed{6}$
 $\boxed{8} - \boxed{5} = \boxed{3}$	 $\boxed{10} - \boxed{2} = \boxed{8}$