


NAME: _____

PERCENT NUMBER LINES

Instructions: Use the number line to solve the following percentage problems.


1. Oliver has 15 toy cars, which make up 30% of his toy collection. How many toys does he have in total?


Number Line: 



Answer: _____


2. Zoe has 20% of her 150-piece puzzle completed. How many pieces has she completed?

Number Line: 



Answer: _____

3. Ethan has 5 blue marbles, which are 10% of his marble collection. How many marbles does he have in total?

Number Line: 



Answer: _____

How Did You Do? 