





NAME: \_\_\_\_\_

# ADDING DOUBLES



Count and complete each double operation.

1  + 



\_\_\_ + \_\_\_ = \_\_\_

2  + 



\_\_\_ + \_\_\_ = \_\_\_

3  + 



\_\_\_ + \_\_\_ = \_\_\_

4  + 

\_\_\_ + \_\_\_ = \_\_\_

5  + 

\_\_\_ + \_\_\_ = \_\_\_

6  + 

\_\_\_ + \_\_\_ = \_\_\_

How Did You Do? 