




# ANSWERS


## ADDING DOUBLES


Count and complete each double operation.


	$4 + 4 = \underline{8}$
---	-------------------------

	$3 + 3 = \underline{6}$
--	-------------------------

	$2 + 2 = \underline{4}$
--	-------------------------

	$6 + 6 = \underline{12}$
---	--------------------------

	$8 + 8 = \underline{16}$
---	--------------------------

	$7 + 7 = \underline{14}$
--	--------------------------

How Did You Do? 😊 😐 ☹️