
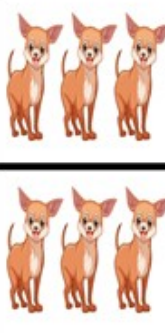



NAME: \_\_\_\_\_


# ADDING DOUBLES


Count and complete each double operation.


	$4 + 4 = \underline{\quad}$
---	-----------------------------

	$3 + 3 = \underline{\quad}$
--	-----------------------------

	$2 + 2 = \underline{\quad}$
--	-----------------------------

	$6 + 6 = \underline{\quad}$
---	-----------------------------

	$8 + 8 = \underline{\quad}$
---	-----------------------------

	$7 + 7 = \underline{\quad}$
--	-----------------------------

How Did You Do? 😊 😐 ☹️