

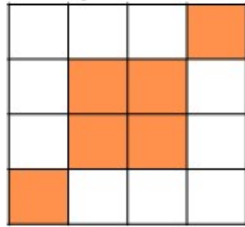
ANSWERS

PERCENT OF SHAPES

Instructions: Determine the percentage that the shaded area represents for each diagram. Use the given formula.

$$\text{Formula: } \frac{\text{Shaded parts}}{\text{Total parts}} \times 100 =$$

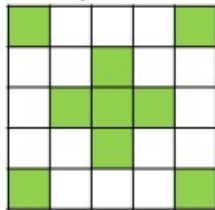
1. Square



▪ Calculation: $\frac{6}{16} \times 100 = 37.5\%$

▪ Answer: 37.5%

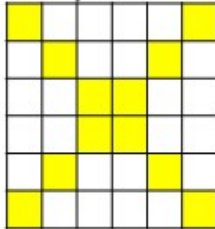
2. Square



▪ Calculation: $\frac{9}{25} \times 100 = 36\%$

▪ Answer: 36%

3. Square



▪ Calculation: $\frac{12}{36} \times 100 = 33.3\%$

▪ Answer: 33.3%

How Did You Do? 😊 😐 😞