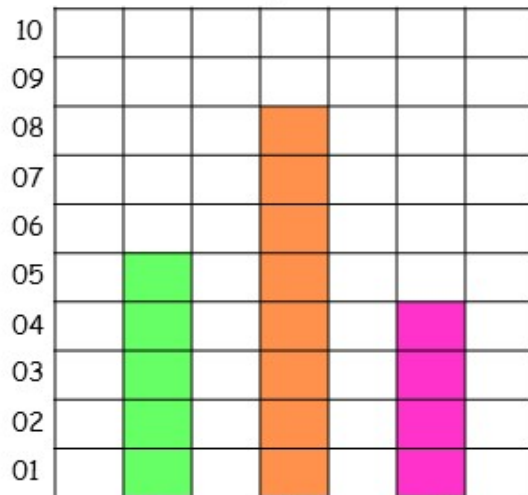





Name _____

NAME: _____


TRIPLE BAR GRAPH

Read the bar graphs, count the squares, and write down how many elements there are of each type.



Doll	How many?
	
	
	



Doll	How many?
	
	
	



How Did You Do? 😊 😐 ☹️