


Name _____


Estimate and Count

Estimate the numbers of items in a set.



Estimate how many apples there are. _____

Count and write many apples there are 32




Estimate how many strawberries there are. _____

Count and write many Strawberries there are 26




Estimate how many pears there are. _____

Count and write many pears there are 21



Estimate how many oranges there are. _____

Count and write many oranges there are 18



Estimate how many lemons there are. _____

Count and write many lemons there are 41