

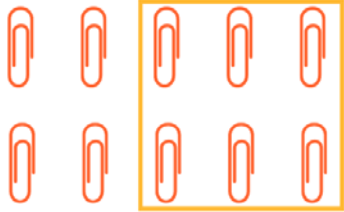
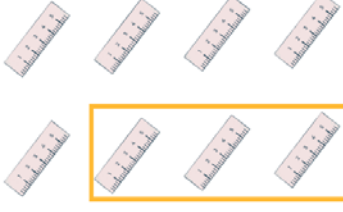

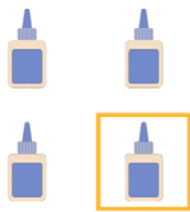


Name _____

Subtraction Sentence

Some items are being taken away. Circle the equation that describes how many items left and answer it.

| | |
|--|--|
|  <p>9 - 4 = ____ 9 - 3 = 6 6 - 3 = ____ 12 - 5 = ____</p> |  <p>6 - 2 = 4 4 - 2 = ____ 8 - 3 = ____ 6 - 3 = ____</p> |
|  <p>10 - 4 = ____ 10 - 5 = ____ 10 - 6 = 4 9 - 6 = ____</p> |  <p>8 - 3 = 5 8 - 4 = ____ 8 - 2 = ____ 8 - 5 = ____</p> |
|  <p>6 - 2 = ____ 6 - 3 = ____ 6 - 4 = 2 6 - 6 = ____</p> |  <p>4 - 4 = ____ 4 - 3 = ____ 4 - 2 = ____ 4 - 1 = 3</p> |