

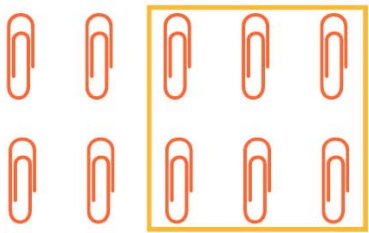
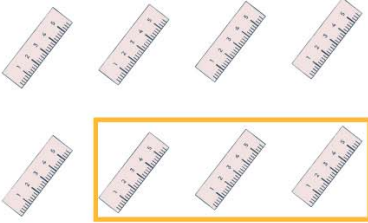

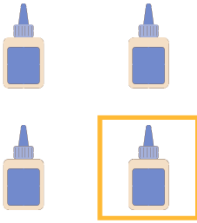


Name _____

Subtraction Sentence

Some items are being taken away. Circle the equation that describes how many items left and answer it.

 <p>$9 - 4 = \underline{\quad}$ $9 - 3 = \underline{6}$ $6 - 3 = \underline{\quad}$ $12 - 5 = \underline{\quad}$</p>	 <p>$6 - 2 = \underline{\quad}$ $4 - 2 = \underline{\quad}$ $8 - 3 = \underline{\quad}$ $6 - 3 = \underline{\quad}$</p>
 <p>$10 - 4 = \underline{\quad}$ $10 - 5 = \underline{\quad}$ $10 - 6 = \underline{\quad}$ $9 - 6 = \underline{\quad}$</p>	 <p>$8 - 3 = \underline{\quad}$ $8 - 4 = \underline{\quad}$ $8 - 2 = \underline{\quad}$ $8 - 5 = \underline{\quad}$</p>
 <p>$6 - 2 = \underline{\quad}$ $6 - 3 = \underline{\quad}$ $6 - 4 = \underline{\quad}$ $6 - 6 = \underline{\quad}$</p>	 <p>$4 - 4 = \underline{\quad}$ $4 - 3 = \underline{\quad}$ $4 - 2 = \underline{\quad}$ $4 - 1 = \underline{\quad}$</p>