

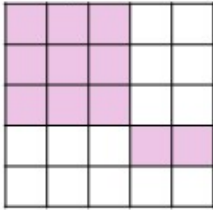
ANSWERS

PERCENT OF SHAPES

Instructions: Determine the percentage that the shaded area represents for each diagram. Use the given formula.

▪ Formula: $\frac{\text{Shaded parts}}{\text{Total parts}} \times 100 =$

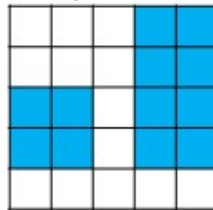
1. Square



▪ Calculation: $\frac{11}{25} \times 100 = 44\%$

▪ Answer: 44%

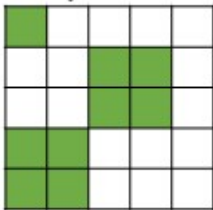
2. Square



▪ Calculation: $\frac{12}{25} \times 100 = 48\%$

▪ Answer: 48%

3. Square



▪ Calculation: $\frac{9}{25} \times 100 = 36\%$

▪ Answer: 36%

How Did You Do? 😊 😐 😞