



Name \_\_\_\_\_

# Estimate and Count

Estimate the number of objects in each box.




about 60 apples




about 90 apples



about 20 pears




about 40 pears




about 70 strawberries



about 30 strawberries



about 40 oranges



about 10 oranges