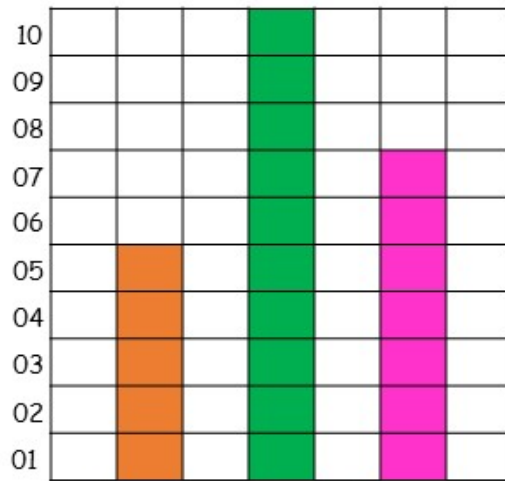





Name _____

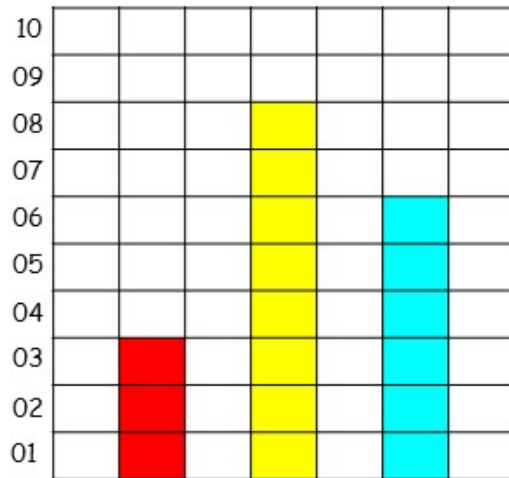
ANSWERS

TRIPLE BAR GRAPH

Read the bar graphs, count the squares, and write down how many elements there are of each type.



hummingbird	How many?
	<u>5</u>
	<u>10</u>
	<u>7</u>



hummingbird	How many?
	<u>3</u>
	<u>8</u>
	<u>6</u>

How Did You Do? 😊 😐 ☹️