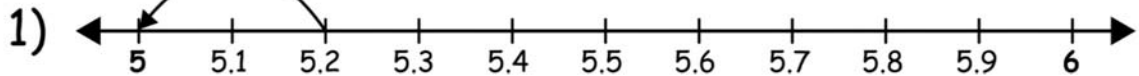


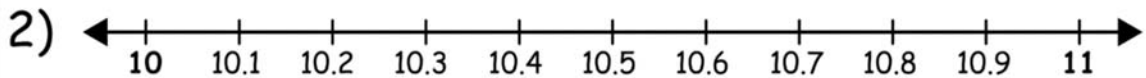
Name _____

Rounding with Number Lines


Use the number lines below to round the decimal numbers to the nearest whole number.



5.6 is nearest to 6.



10.2 is nearest to ____.



25.4 is nearest to ____.



72.8 is nearest to ____.



120.6 is nearest to ____.