







Name \_\_\_\_\_

# Estimate and Count

Estimate the shaded squares in each grid to the nearest 10.

 <p>Estimate <input type="text" value="50"/> Count <input type="text" value="51"/></p>	 <p>Estimate <input type="text" value="40"/> Count <input type="text" value="44"/></p>
 <p>Estimate <input type="text" value="60"/> Count <input type="text" value="64"/></p>	 <p>Estimate <input type="text" value="60"/> Count <input type="text" value="59"/></p>
 <p>Estimate <input type="text" value="70"/> Count <input type="text" value="71"/></p>	 <p>Estimate <input type="text" value="60"/> Count <input type="text" value="57"/></p>