






Name _____

Subtraction Sentence

Read the questions and cross on the required objects.

<p>Tom popped 2 of the balloons. Draw a cross on 2 balloons and complete the subtraction sentences.</p>  $\boxed{8} - \boxed{2} = \boxed{6}$
<p>Sarah gave 5 flowers to her mom. Draw a cross on 5 flowers and complete the subtraction sentences.</p>  $\boxed{10} - \boxed{5} = \boxed{5}$
<p>Jack lost 4 marbles. Draw a cross on 4 marbles and complete the subtraction sentences.</p>  $\boxed{12} - \boxed{4} = \boxed{8}$
<p>Lily ate 7 candies. Draw a cross on 7 candies and complete the subtraction sentences.</p>  $\boxed{10} - \boxed{7} = \boxed{3}$
<p>Ben gave 3 toy cars to his brother. Draw a cross on 3 toy cars and complete the subtraction sentences.</p>  $\boxed{5} - \boxed{3} = \boxed{2}$