







Name \_\_\_\_\_

# Estimate and Count

Estimate the shaded squares in each grid to the nearest 10.

 <p>Estimate <input type="text"/> Count <input type="text"/></p>	 <p>Estimate <input type="text"/> Count <input type="text"/></p>
 <p>Estimate <input type="text"/> Count <input type="text"/></p>	 <p>Estimate <input type="text"/> Count <input type="text"/></p>
 <p>Estimate <input type="text"/> Count <input type="text"/></p>	 <p>Estimate <input type="text"/> Count <input type="text"/></p>