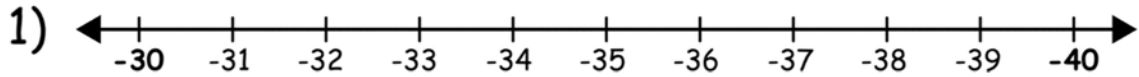


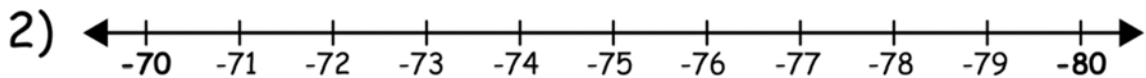
Name _____

Rounding with Number Lines

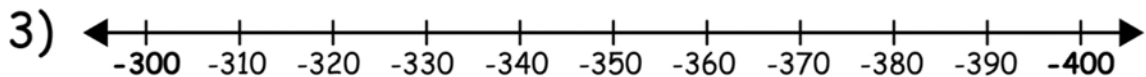
Use the number lines below to round the negative numbers to the given place.



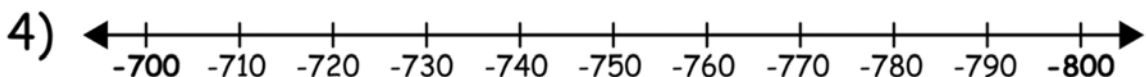
-33 Rounded to the nearest 10 _____.



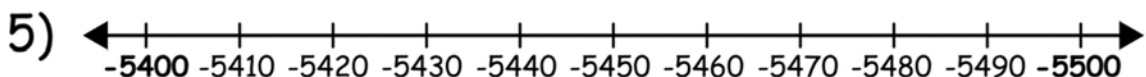
-76 Rounded to the nearest 10 _____.



-350 Rounded to the nearest 100 _____.



-740 Rounded to the nearest 100 _____.



-5480 Rounded to the nearest 100 _____.