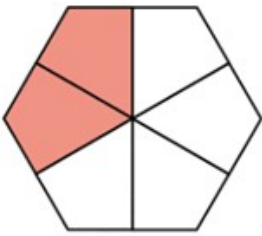


ANSWERS

PERCENT OF SHAPES


Instructions: Determine the percentage that the shaded area represents for each diagram. Use the given formula.

Formula: $\frac{\text{Shaded parts}}{\text{Total parts}} \times 100 =$



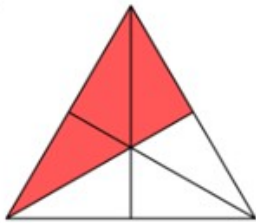
▪ Calculation: $\frac{2}{6} \times 100 = 33.3 \%$

▪ Answer: 33.3 %



▪ Calculation: $\frac{3}{4} \times 100 = 75 \%$

▪ Answer: 75 %



▪ Calculation: $\frac{3}{6} \times 100 = 50 \%$

▪ Answer: 50 %

How Did You Do? 😊 😐 😞