









Name _____

Estimate and Count

Estimate and count the number of shapes.

 <p>Estimate <input type="text" value="20"/> Count <input type="text" value="21"/></p>	 <p>Estimate <input type="text"/> Count <input type="text"/></p>
 <p>Estimate <input type="text"/> Count <input type="text"/></p>	 <p>Estimate <input type="text"/> Count <input type="text"/></p>
 <p>Estimate <input type="text"/> Count <input type="text"/></p>	 <p>Estimate <input type="text"/> Count <input type="text"/></p>
 <p>Estimate <input type="text"/> Count <input type="text"/></p>	 <p>Estimate <input type="text"/> Count <input type="text"/></p>