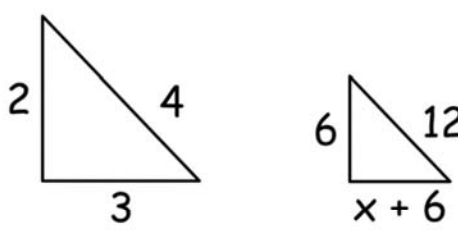
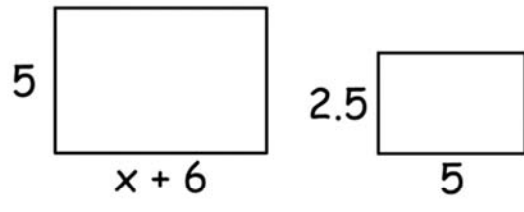
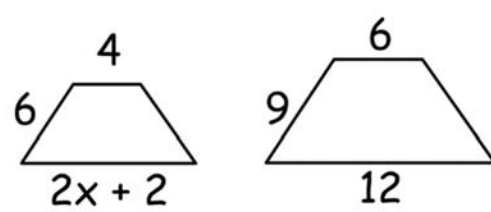
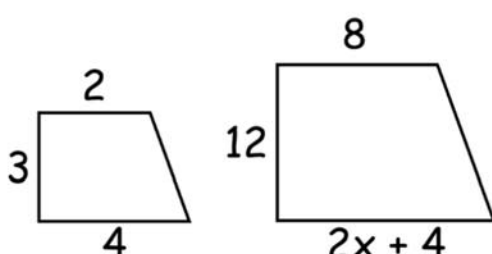
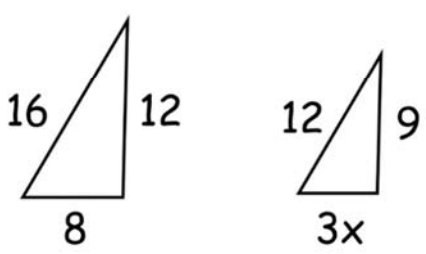
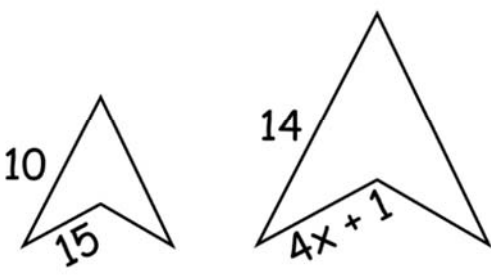


Name \_\_\_\_\_

# Scale factors

The shapes in each pair are similar. Find the value of  $x$

<p>1)</p>  <p>The value of <math>x =</math> _____</p>	<p>2)</p>  <p>The value of <math>x =</math> _____</p>
<p>3)</p>  <p>The value of <math>x =</math> _____</p>	<p>4)</p>  <p>The value of <math>x =</math> _____</p>
<p>5)</p>  <p>The value of <math>x =</math> _____</p>	<p>6)</p>  <p>The value of <math>x =</math> _____</p>