





Name _____

Estimate and Count

How many dots are there? Estimate to the nearest 10.
And tick the answer.

		
About 10 <input type="checkbox"/>	About 20 <input checked="" type="checkbox"/>	About 30 <input type="checkbox"/>
		
About 10 <input type="checkbox"/>	About 20 <input type="checkbox"/>	About 30 <input checked="" type="checkbox"/>
		
About 10 <input checked="" type="checkbox"/>	About 20 <input type="checkbox"/>	About 30 <input type="checkbox"/>
		
About 10 <input type="checkbox"/>	About 20 <input checked="" type="checkbox"/>	About 30 <input type="checkbox"/>