

NAME: \_\_\_\_\_

## SOLVING EQUATIONS

Directions: Solve each equation and check your answers.

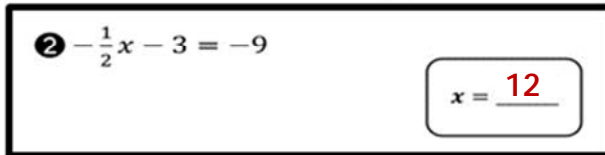
1  $2x - 7 = -27$

$x = -10$






2  $-\frac{1}{2}x - 3 = -9$

$x = 12$




3  $-6x + 13 = 19$

$x = -1$



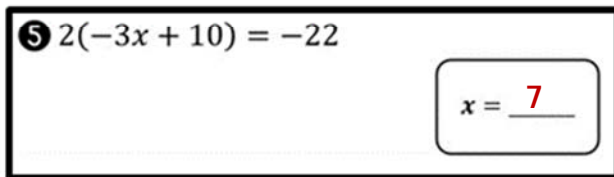
4  $12x - 7 = -1$

$x = 0.5$



5  $2(-3x + 10) = -22$

$x = 7$



How Did You Do? 😊 😐 😞