





Name \_\_\_\_\_

# Estimate and Count

How many dots are there? Estimate to the nearest 10.  
And tick the answer.

|  |                                   |                                   |
|--|-----------------------------------|-----------------------------------|
|    |                                   |                                   |
| About 10 <input type="checkbox"/>  | About 20 <input type="checkbox"/> | About 30 <input type="checkbox"/> |
|   |                                   |                                   |
| About 10 <input type="checkbox"/>  | About 20 <input type="checkbox"/> | About 30 <input type="checkbox"/> |
|  |                                   |                                   |
| About 10 <input type="checkbox"/>  | About 20 <input type="checkbox"/> | About 30 <input type="checkbox"/> |
|  |                                   |                                   |
| About 10 <input type="checkbox"/>  | About 20 <input type="checkbox"/> | About 30 <input type="checkbox"/> |