
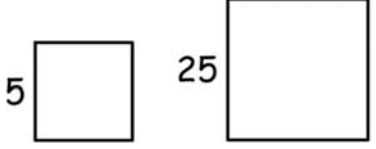

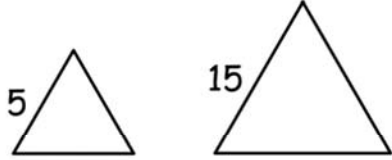
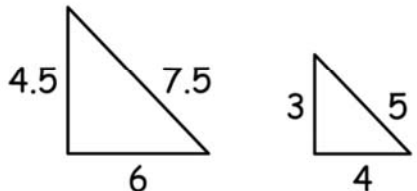
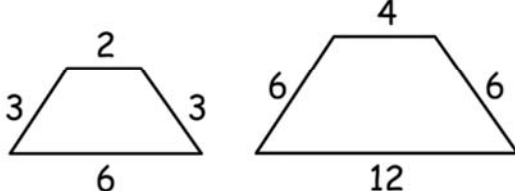
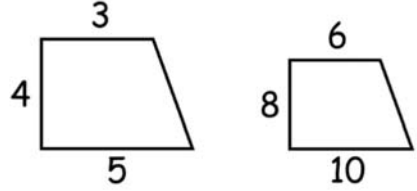
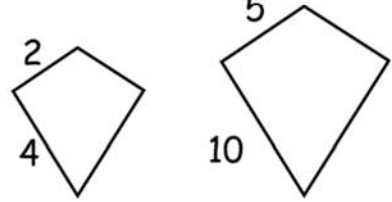


Name \_\_\_\_\_

# Scale factors

The shapes in each pair are similar.

Find the scale factor of the smaller figure to the larger figure.

<p>1)</p>  <p>Scale factor: _____</p>	<p>2)</p>  <p>Scale factor: _____</p>
<p>3)</p>  <p>Scale factor: _____</p>	<p>4)</p>  <p>Scale factor: _____</p>
<p>5)</p>  <p>Scale factor: _____</p>	<p>6)</p>  <p>Scale factor: _____</p>
<p>7)</p>  <p>Scale factor: _____</p>	<p>8)</p>  <p>Scale factor: _____</p>