


NAME: _____

ADDING DOUBLES


Count and complete each double operation.

1




$$\underline{\quad} + \underline{\quad} = \underline{\quad}$$

4




$$\underline{\quad} + \underline{\quad} = \underline{\quad}$$

2




$$\underline{\quad} + \underline{\quad} = \underline{\quad}$$

5



$$\underline{\quad} + \underline{\quad} = \underline{\quad}$$

3



$$\underline{\quad} + \underline{\quad} = \underline{\quad}$$

6



$$\underline{\quad} + \underline{\quad} = \underline{\quad}$$

How Did You Do? 😊 😐 ☹️