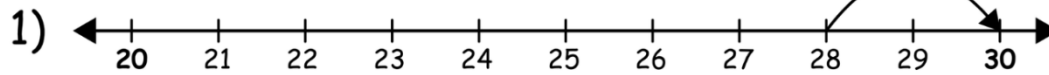


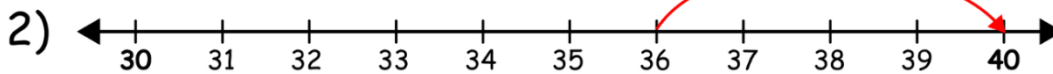
Name _____

Rounding with Number Lines

Use the number lines below to round the two digits numbers to the nearest 10.




28 is nearest to 30.



36 is nearest to 40.



42 is nearest to 40.



57 is nearest to 60.



94 is nearest to 90.