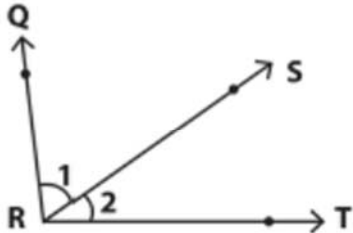


Name \_\_\_\_\_

## Naming Angles Answer Key

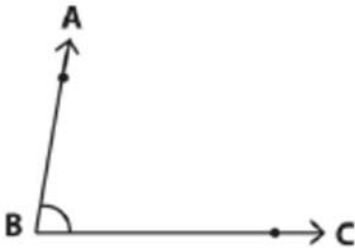
Look at each figure and answer the questions.



1) Name the vertex     **R**    

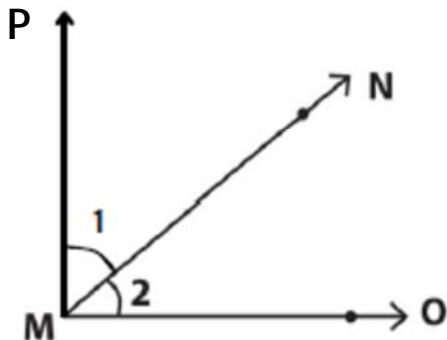
2) Name the arms for  $\angle 1$      **RQ, RS**    

3) Name the arms of the angle with vertex R.     **RQ, RS, RT**    



1) Name the arms of the angle.     **BA, BC**    

2) B is called the \_\_\_\_\_ of the angle.     **origin or vertex**    



1) Name the arms of the angle.     **MP, MN, MO**    

2) M is called the \_\_\_\_\_ of the angle.     **origin or vertex**    

3) Name the arms of  $\angle 2$ .     **MN, MO**