

Name _____

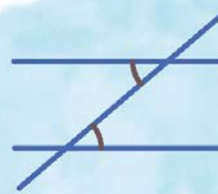
Name :

Class :

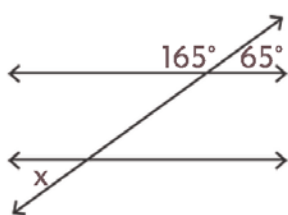


Alternative Angles

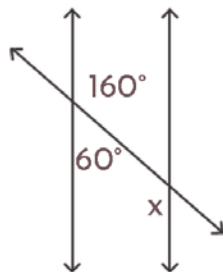
The angles that occur on opposite sides of the transversal line and have the same size



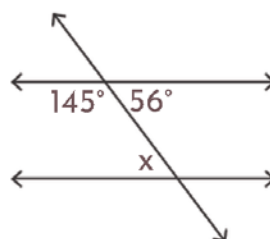
Find the value of x in each alternative angle figure below where two parallel lines are cut by a transversal



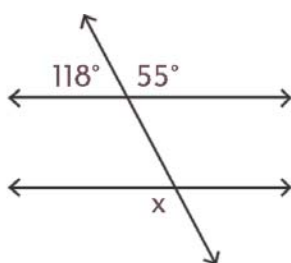
$x =$ _____



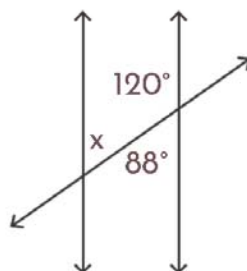
$x =$ _____



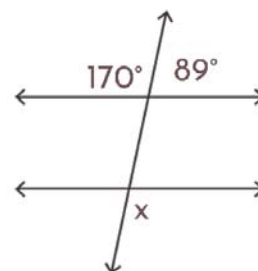
$x =$ _____



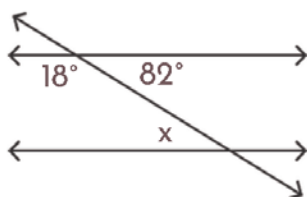
$x =$ _____



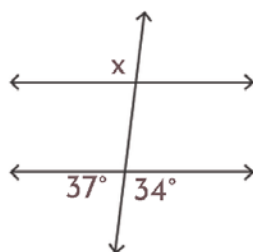
$x =$ _____



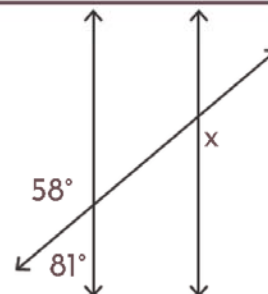
$x =$ _____



$x =$ _____



$x =$ _____



$x =$ _____