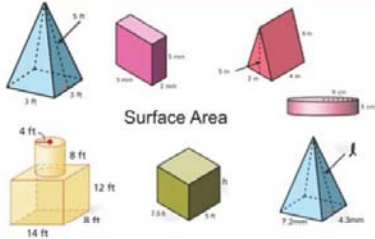


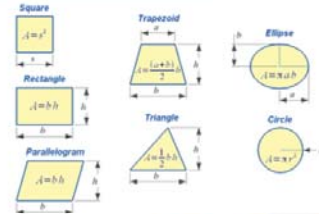
Name :

Class :

Surface Area of Composite Figures

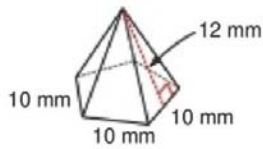


The area of composite figures is the area that is covered by any composite shape.



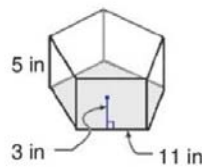
Find the surface area of each Composite figure.

1)



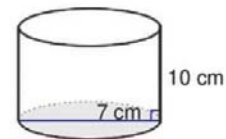
$$4072.05 \text{ mm}^2$$

2)



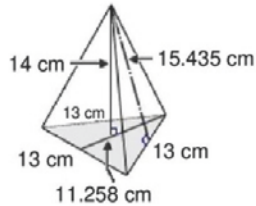
$$691.36 \text{ in}^2$$

3)



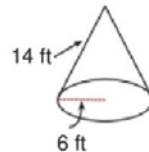
$$296.88 \text{ cm}^2$$

4)



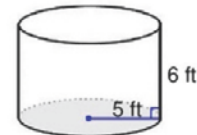
$$374.16 \text{ cm}^2$$

5)



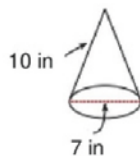
$$376.99 \text{ ft}^2$$

6)



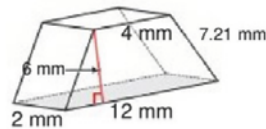
$$345.58 \text{ ft}^2$$

7)



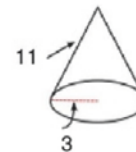
$$148.44 \text{ in}^2$$

8)



$$156.84 \text{ mm}^2$$

9)



$$131.95^2$$