

Name: \_\_\_\_\_

Class: \_\_\_\_\_



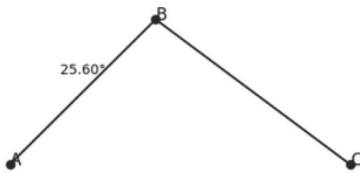
# NAMING THE ANGLES USING THREE POINTS

use all three points and name each  
angle in single way



∠PQR

a)



∠ABC

d)



∠MNO

g)



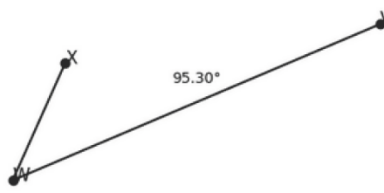
∠MNO

b)



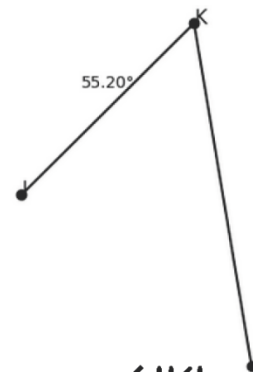
∠DEF

e)



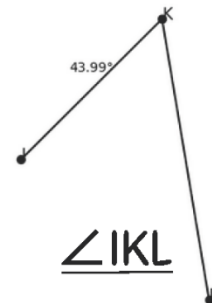
∠XNV

h)



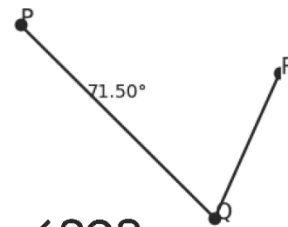
∠IKL

c)



∠IKL

f)



∠PQR

i)