

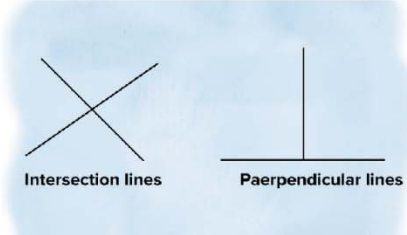
Name :

Class :

Perpendicular and Intersecting Lines

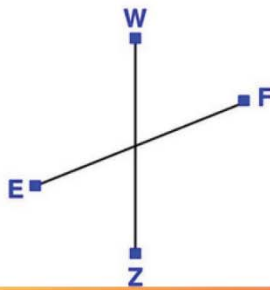


Perpendicular lines are two lines that intersect at a right angle (90°). Intersecting lines are two lines that cross each other at any angle



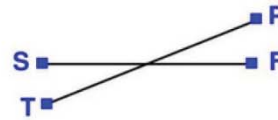
State whether the given pair of lines are parallel, perpendicular, or intersecting.

1)



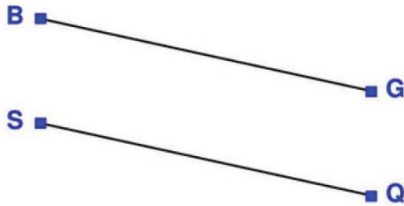
Answer: Intersection

4)



Answer: Intersection

2)



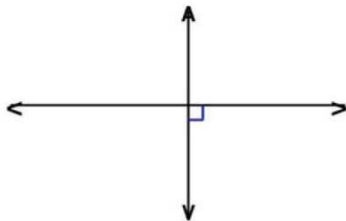
Answer: Parallel

5)



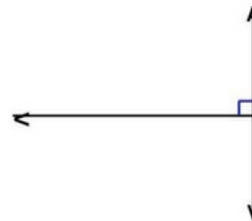
Answer: Parallel

3)



Answer: Perpendicular

6)



Answer: Perpendicular