

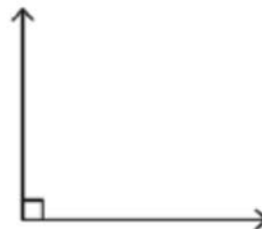
Name _____

Drawing Angles and Points

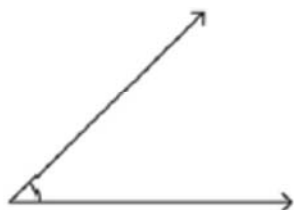
Draw an angle having the point E in its exterior.

E
•

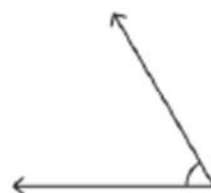
Draw a point M on the angle.



Mark a point S in the interior of the angle.



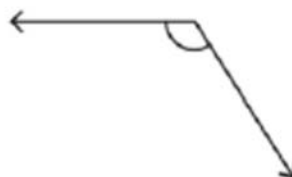
Mark a point G in the exterior of the angle.



Mark a point W in the exterior of the angle.



Mark a point K on the angle.



Draw an angle with the point H laying on it

•
H

Draw an angle with the point P laying on it

•
P