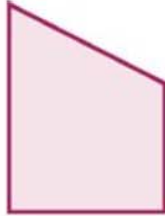


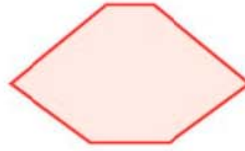
Name _____

Identifying and Counting Right Angles


For each shape below, circle all the angles that fit the description.



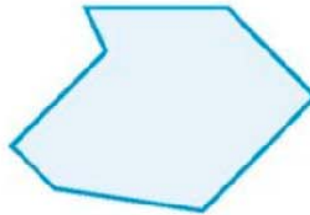
A right angle



An angle greater than 90°

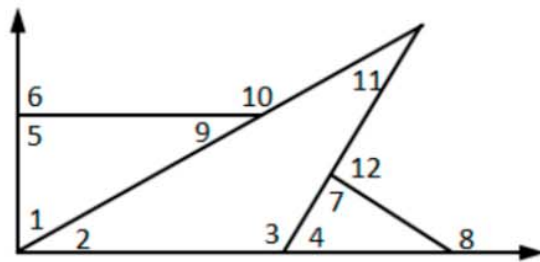


An acute angle



An angle less than or equal to 90°

Write each numbered angle in the correct column.



Acute angle	Right Angle	Obtuse Angle