

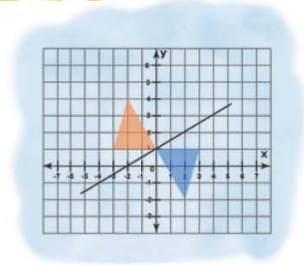
Name :

Class :



# Transformation

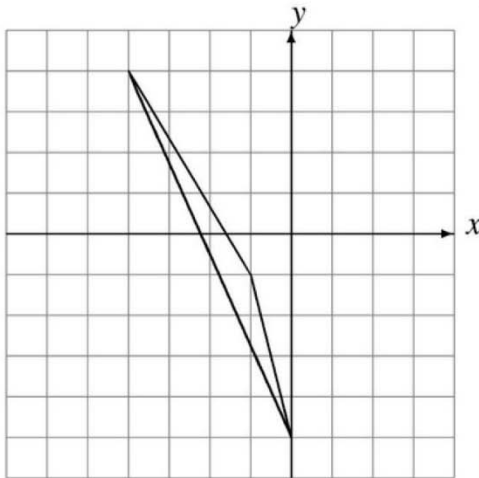
Transformations are changes done in the shapes on a coordinate plane by rotation or reflection or translation



Draw each dilated image.

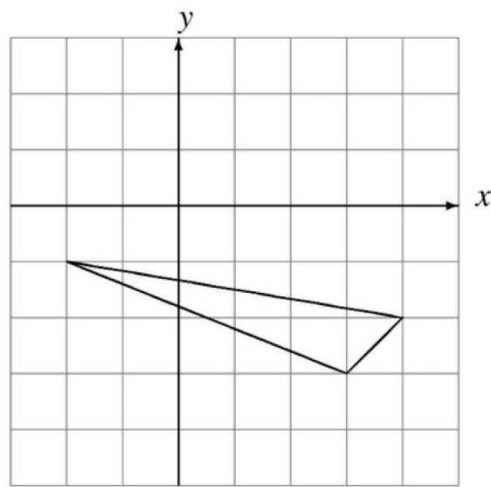
1)

Dilate by  $\frac{1}{3}$  using center (0, 0).



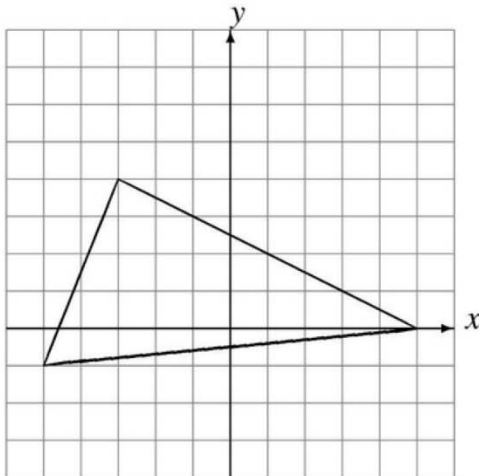
2)

Dilate by  $\frac{1}{4}$  using center (0, 0).



3)

Dilate by  $\frac{1}{3}$  using center (0, 0).



4)

Dilate by  $\frac{1}{3}$  using center (0, 0).

