

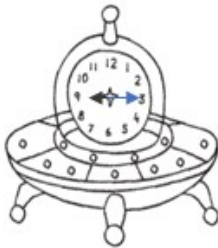
Name \_\_\_\_\_

# ANSWERS

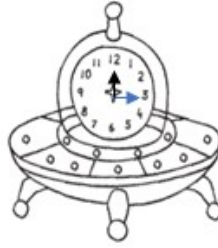
## WORKSHEET 7- TIME TO THE QUARTER HOUR

Read the time indicated by each analog clock and write the letter of the digital clock that corresponds to it. Color when finished.

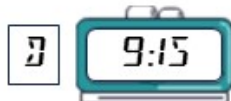
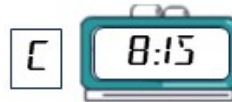
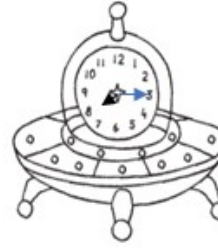
D



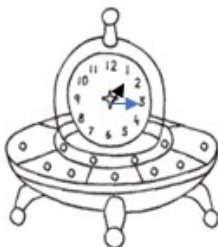
A




C




B



E



F



How Did You Do? 😊 😐 ☹️