

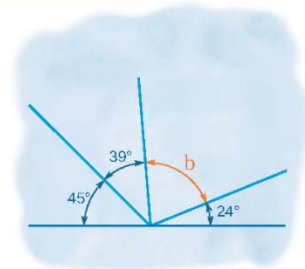
Name :

Class :

Angles on a Straight Line

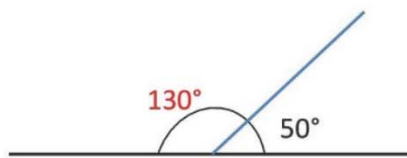


Angles on a straight line relate to the sum of angles that can be arranged together so that they form a straight line

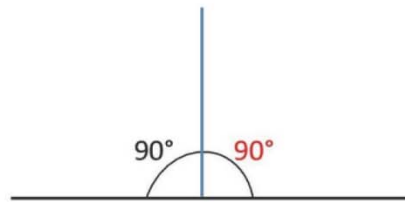


Work out the missing angles. Remember that the angle in a straight line is equal to 180 deg .


1)



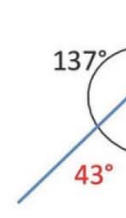
2)



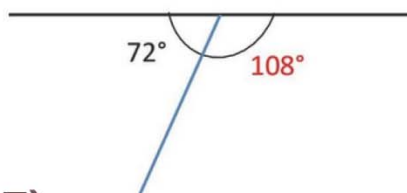
3)



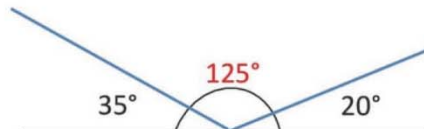
4)



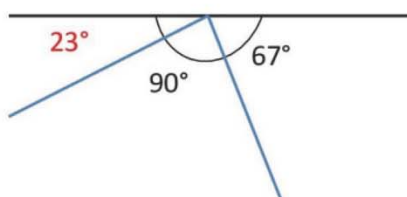
5)



6)



7)



8)

