

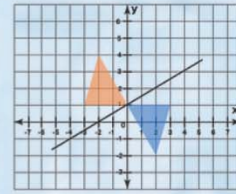
Name :

Class :



Transformation

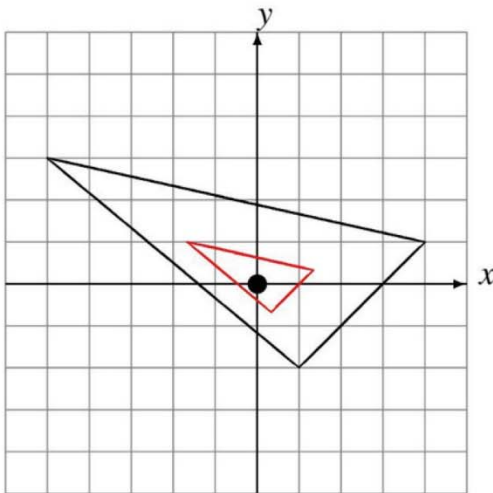
Transformations are changes done in the shapes on a coordinate plane by rotation or reflection or translation



Draw each dilated image.

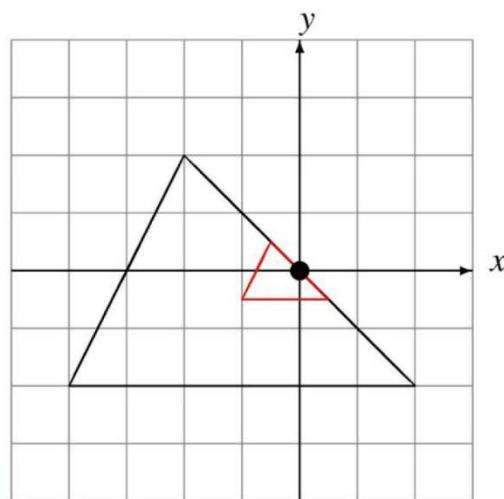
1)

Dilate by $\frac{1}{3}$ using center $(0, 0)$.



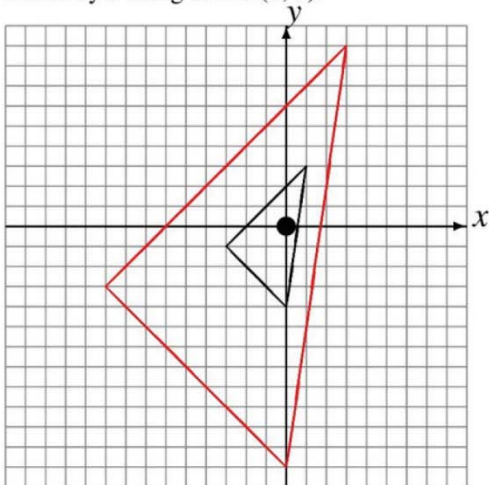
2)

Dilate by $\frac{1}{4}$ using center $(0, 0)$.



3)

Dilate by 3 using center $(0, 0)$.



4)

Dilate by 3 using center $(0, 0)$.

