

Name: _____

Class: _____



NAMING THE ANGLES PRACTIC EXERCISE

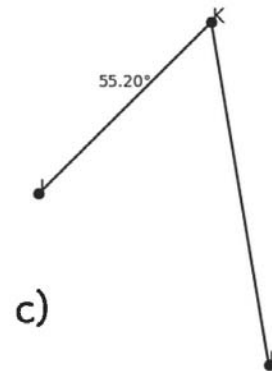
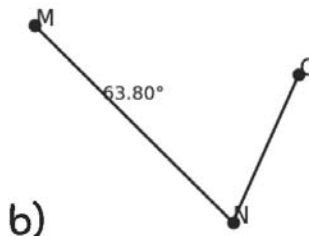
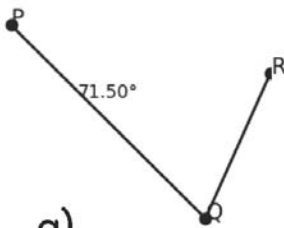
Identify the missing below.

A) Draw and label an angle, using the given information

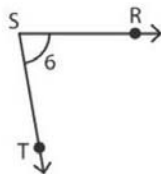
1) an acute angle, $\angle 5$

2) an obtuse angle, $\angle MNP$

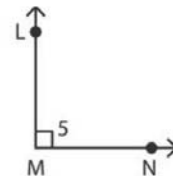
B) use all three points and name each angle in two different ways.



C) Write the missing representation of each angle



_____ $\cong \angle RST \cong \angle 6 \cong \angle S$



$\angle LMN \cong$ _____ $\cong \angle NML \cong$