

Name \_\_\_\_\_

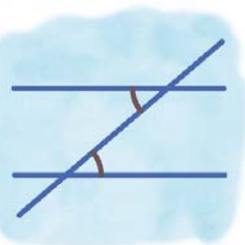
Name :

Class :

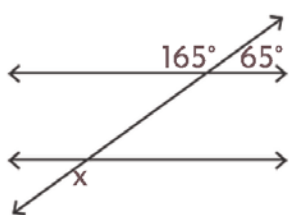


# Alternative Angles

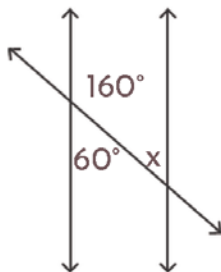
The angles that occur on opposite sides of the transversal line and have the same size



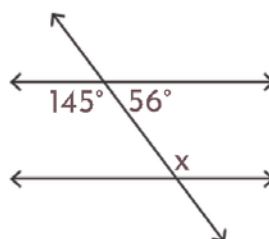
Find the value of  $x$  in each alternative angle figure below where two parallel lines are cut by a transversal



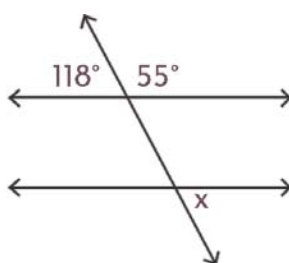
$x =$  \_\_\_\_\_



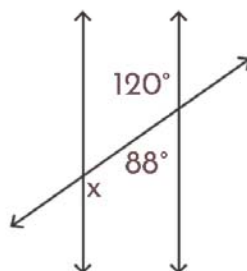
$x =$  \_\_\_\_\_



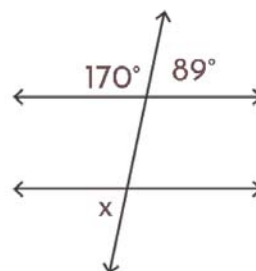
$x =$  \_\_\_\_\_



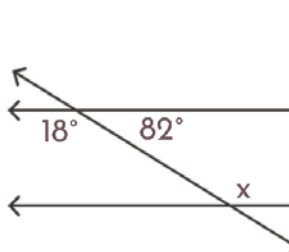
$x =$  \_\_\_\_\_



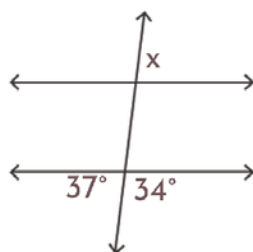
$x =$  \_\_\_\_\_



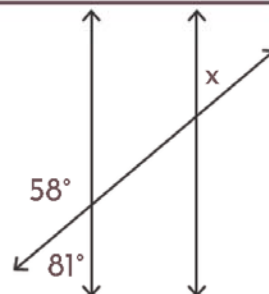
$x =$  \_\_\_\_\_



$x =$  \_\_\_\_\_



$x =$  \_\_\_\_\_



$x =$  \_\_\_\_\_