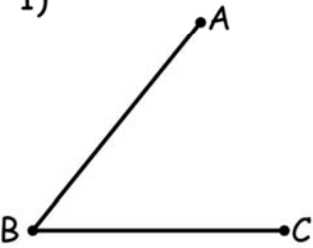
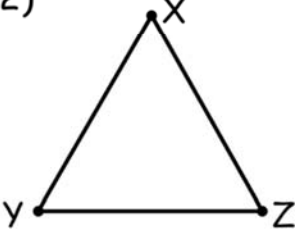
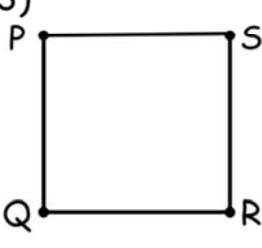
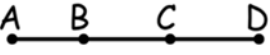
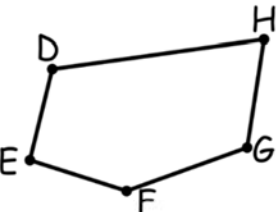
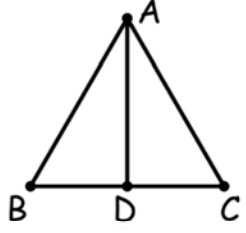
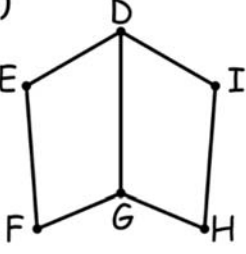
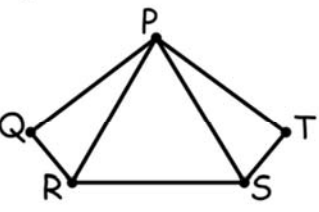
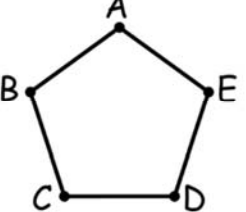


Name _____

Lines, Rays and Line Segments

Name all the line segments in each of the following figures.

1)  <u>$\overline{AB}, \overline{BC}$</u>	2)  <u>$\overline{XY}, \overline{YZ}, \overline{XZ}$</u>	3)  <u>$\overline{PQ}, \overline{QR}, \overline{RS}, \overline{PS}$</u>
4)  <u>$\overline{AB}, \overline{BC}, \overline{CD}, \overline{AC}, \overline{AD}$ \overline{BD}</u>	5)  <u>$\overline{DE}, \overline{EF}, \overline{FG}, \overline{GH}, \overline{DH}$</u>	6)  <u>$\overline{AB}, \overline{BC}, \overline{AC}, \overline{BD}, \overline{CD}$ \overline{AD}</u>
7)  <u>$\overline{DE}, \overline{EF}, \overline{FG}, \overline{GH}, \overline{HI}$ $\overline{DI}, \overline{DG}$</u>	8)  <u>$\overline{PQ}, \overline{QR}, \overline{RS}, \overline{ST}, \overline{PT}$ $\overline{PR}, \overline{PS}$</u>	9)  <u>$\overline{AB}, \overline{BC}, \overline{CD}, \overline{DE}, \overline{AE}$</u>