

Name \_\_\_\_\_

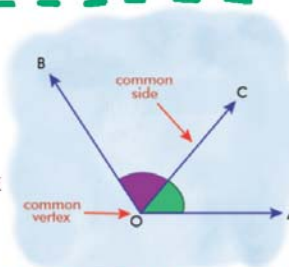
Name :

Class :



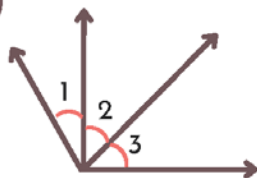
# Adjacent Angles

A pair of angles that share a common vertex and a common arm (but do not overlap).

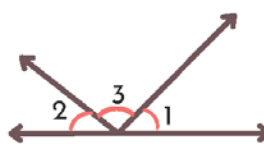


Identify the two pairs of adjacent angles in each figure

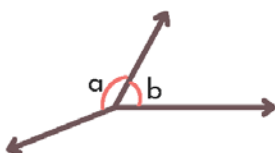
1)



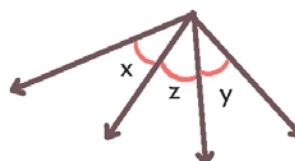
2)



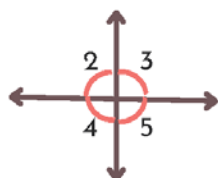
3)



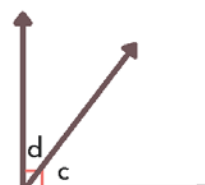
4)



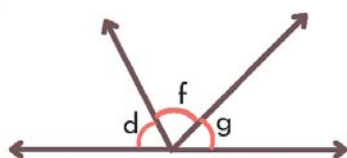
5)



6)



7)



8)

