



Name _____

Reading and Sorting Thermometers Answers


Directions: Write the measures of each thermometer on the lines. Then write the letters of each thermometer in order from coolest to hottest temperature.




a) 40°




b) 19°



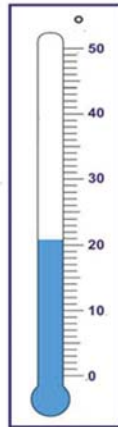
c) 41°




d) 33°




e) 13°




f) 21°



g) 24°



h) 3°



i) 47°

h

coolest

e

b

f

g

d

a

c

i

hottest

