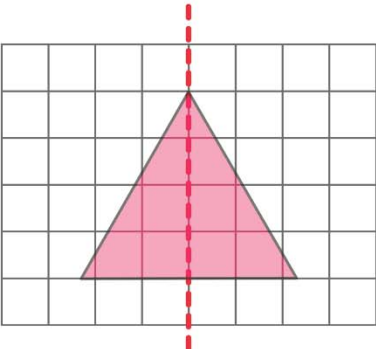
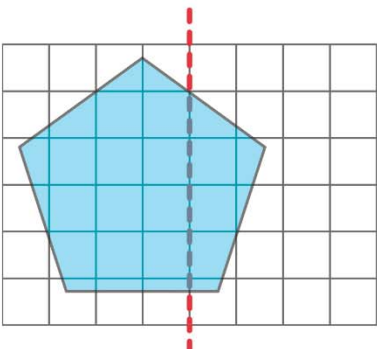
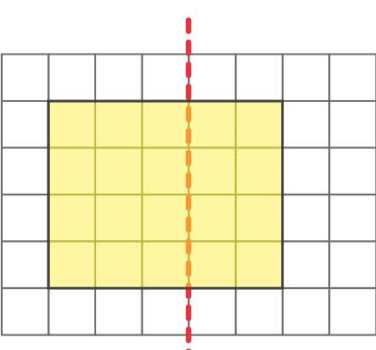
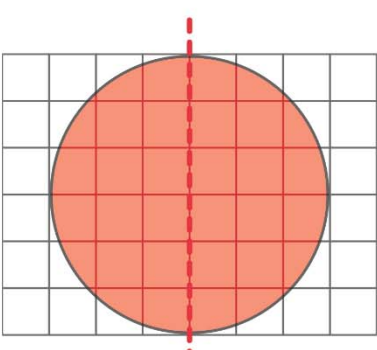
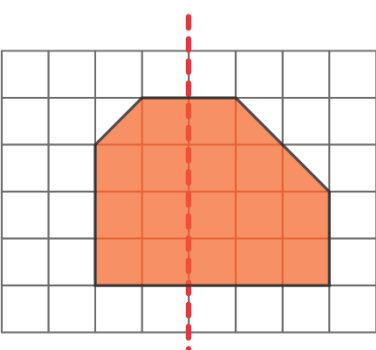
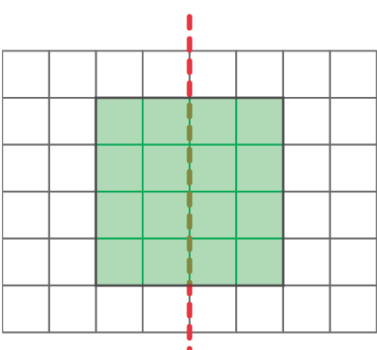


Name _____

Symmetry

Is a line of symmetry being displayed in each box?

 <p>Yes <input checked="" type="checkbox"/></p> <p>No <input type="checkbox"/></p>	 <p>Yes <input type="checkbox"/></p> <p>No <input checked="" type="checkbox"/></p>
 <p>Yes <input type="checkbox"/></p> <p>No <input checked="" type="checkbox"/></p>	 <p>Yes <input checked="" type="checkbox"/></p> <p>No <input type="checkbox"/></p>
 <p>Yes <input type="checkbox"/></p> <p>No <input checked="" type="checkbox"/></p>	 <p>Yes <input checked="" type="checkbox"/></p> <p>No <input type="checkbox"/></p>