

Name :

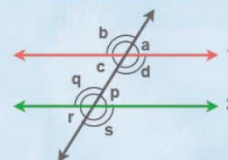
Class :

# Parallel lines and Transversals



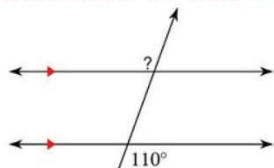
Parallel lines are lines in the same plane that go in the same direction and never intersect. When a third line, called a transversal

Parallel Lines and Transversal



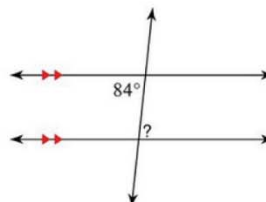
Find the measure of each angle indicated

1)



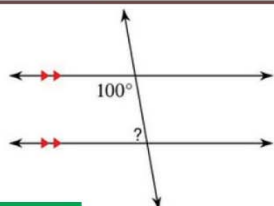
110°

2)



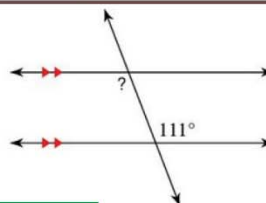
84°

3)



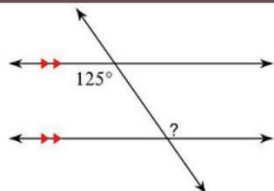
80°

4)



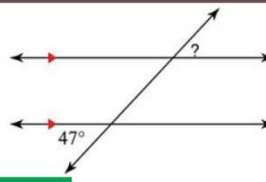
111°

5)



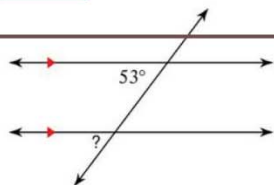
125°

6)



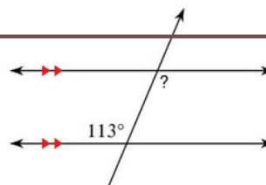
47°

7)



53°

8)



113°