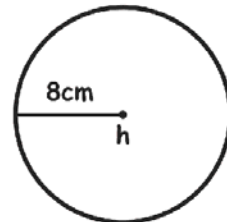
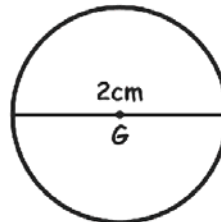
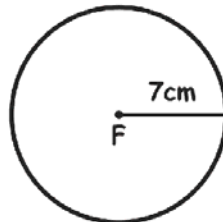
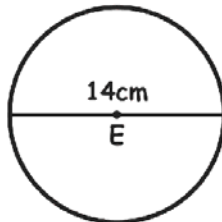
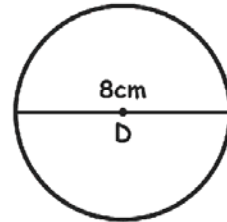
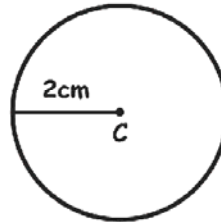
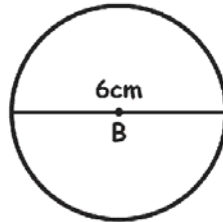
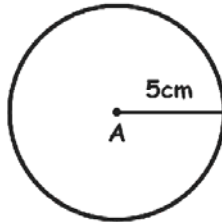


Name \_\_\_\_\_

# Radius & Diameter

Look at each circle carefully and answer the following questions.



- 1) The Diameter of a circle A is \_\_\_\_\_
- 2) The Radius of a circle B is \_\_\_\_\_
- 3) The Diameter of a circle C is \_\_\_\_\_
- 4) The Radius of a circle D is \_\_\_\_\_
- 5) The Radius of a circle E is \_\_\_\_\_
- 6) The Diameter of a circle F is \_\_\_\_\_
- 7) Which circle is the largest among all? \_\_\_\_\_
- 8) Which circle is the smallest among all? \_\_\_\_\_