

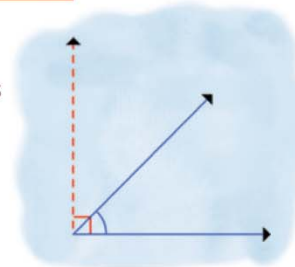
Name :

Class :

Estimating Angle

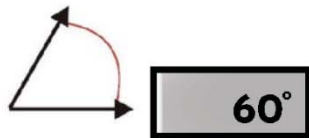


Estimating an angle means trying to guess at the measurement of the angle.



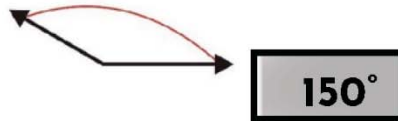
Estimate the angle measures in degrees

1)



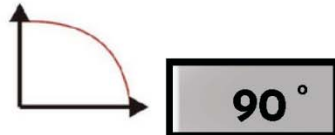
60°

2)



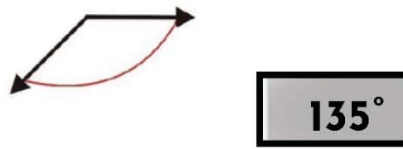
150°

3)



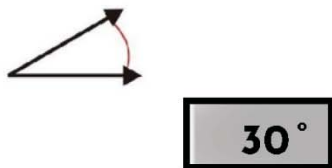
90°

4)



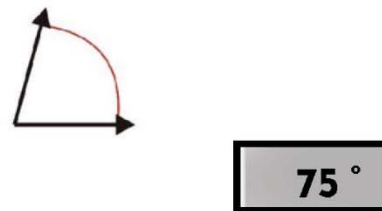
135°

5)



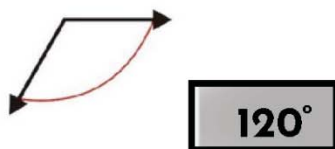
30°

6)



75°

7)



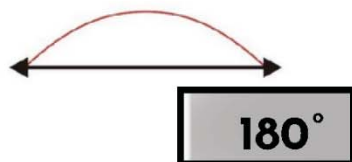
120°

8)



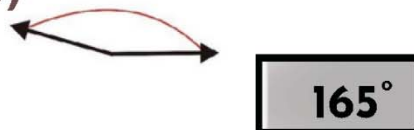
30°

9)



180°

10)



165°