

Name _____

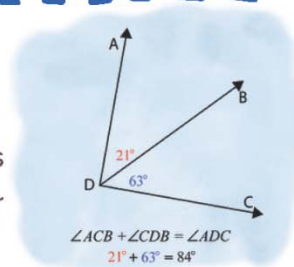
Name :

Class :

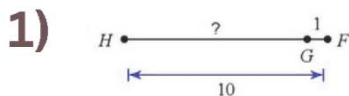


Angle Postulate

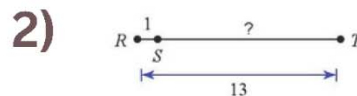
The sum of two adjacent angle measures will be equal to the measure of the larger angle they form.



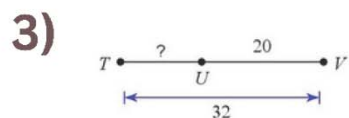
Find the length indicated



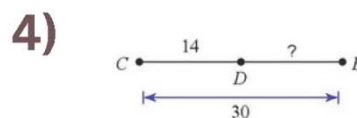
9



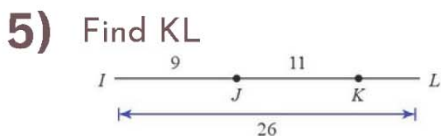
12



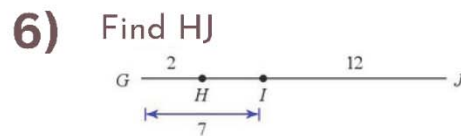
12



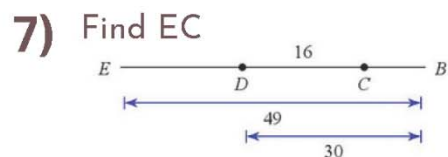
16



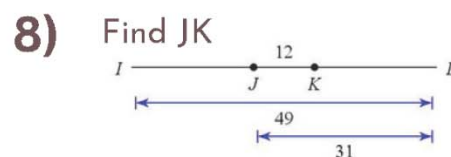
6



17

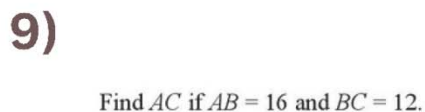


35

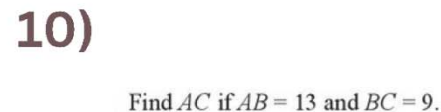


30

Points A, B, and C are collinear. Point B is between A and C. Find the length indicated



28



22