

Name _____

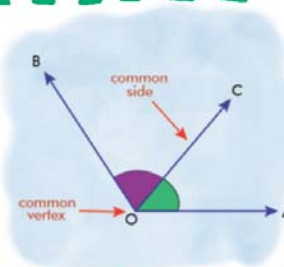
Name :

Class :



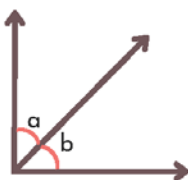
Adjacent Angles

A pair of angles that share a common vertex and a common arm (but do not overlap).



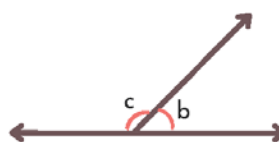
Identify the two pairs of adjacent angles in each figure

1)



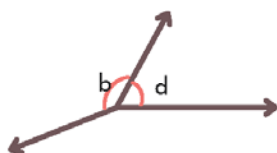
$\angle a$ and $\angle b$

2)



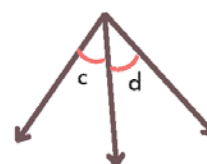
$\angle b$ and $\angle c$

3)



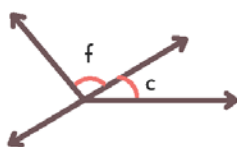
$\angle b$ and $\angle d$

4)



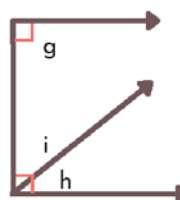
$\angle c$ and $\angle d$

5)



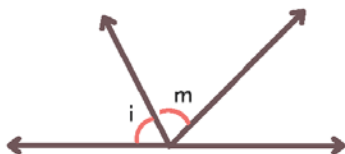
$\angle f$ and $\angle c$

6)



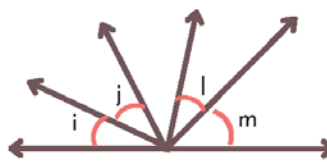
$\angle i$ and $\angle h$

7)



$\angle i$ and $\angle m$

8)



$\angle i$, $\angle j$ and $\angle l$, $\angle m$